

Homework Page




Name _____ Hour: _____ Due: 2-2

Review	Find the missing value: $\frac{3}{7} = \frac{x}{21}$	
Review	Find the missing value: $\frac{1}{2} = \frac{x}{10}$	
Review	Find the missing value: $\frac{2}{3} = \frac{8}{x}$	

*Must show work to receive credit!

Homework Page

Name _____ Hour: _____ Due: 2-2

<p>Current</p>	<p>Find the area and perimeter:</p> 	
<p>Current</p>	<p>Find the area and perimeter:</p> 	
<p>Current</p>	<p>Find the area and perimeter:</p> 	

*Must show work to receive credit!