

# Homework Page

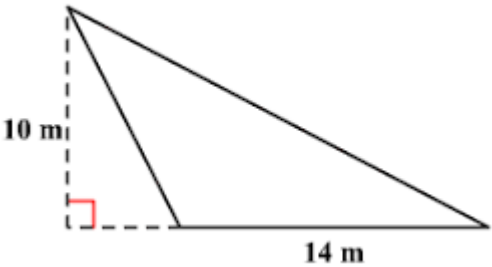
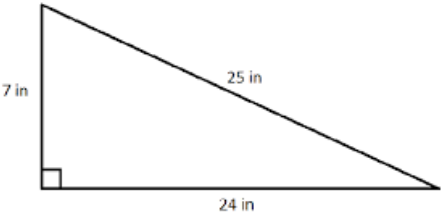
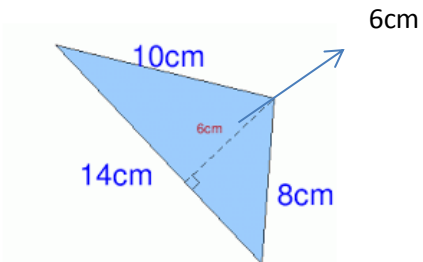
Name \_\_\_\_\_ Hour: \_\_\_\_\_ Due: 2-9

Review	<b>Find the missing value:</b> $\frac{3}{4} = \frac{x}{24}$	
Review	<b>Find the missing value:</b> $\frac{3}{4} = \frac{x}{80}$	
Review	<b>Find the missing value:</b> $\frac{1}{8} = \frac{8}{x}$	

\*Must show work to receive credit!

# Homework Page

Name \_\_\_\_\_ Hour: \_\_\_\_\_ Due: 2-9

<p>Current</p>	<p>Find the area:</p> 	
<p>Current</p>	<p>Find the area:</p> 	
<p>Current</p>	<p>Find the area:</p> 	

\*Must show work to receive credit!

# Homework Page

Name \_\_\_\_\_ Hour: \_\_\_\_\_ Due: 2-9

\*Must show work to receive credit!