

Homework Page

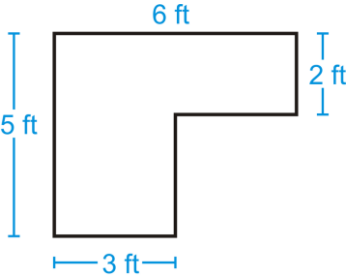
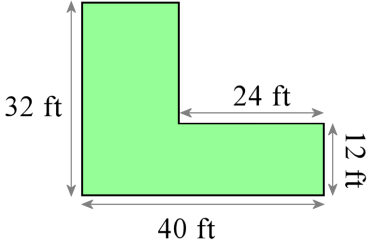

Name _____ Hour: _____ Due: 3-2

Review	Solve, simplify if necessary: $\frac{3}{5} \div \frac{4}{3} =$	
Review	Solve, simplify if necessary: $\frac{1}{2} \div \frac{4}{7} =$	
Review	Solve, simplify if necessary: $\frac{5}{6} \times \frac{2}{3} =$	

*Must show work to receive credit!

Homework Page

Name _____ Hour: _____ Due: 3-2

<p>Current</p>	<p>Find the area:</p> 	
<p>Current</p>	<p>Find the area:</p> 	
<p>Current</p>	<p>Find the area:</p> 	

*Must show work to receive credit!

Homework Page

Name _____ Hour: _____ Due: 3-2

*Must show work to receive credit!